

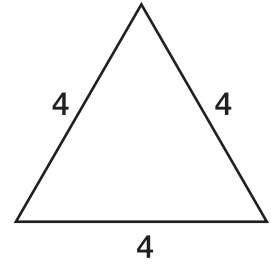
## Skill 24 Symmetry

1. How many lines of symmetry does a circle have?



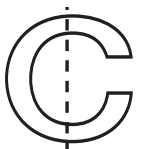
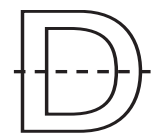
- A 2
- B 4
- C 8
- D An infinite number

3. How many lines of symmetry does this triangle have?

- A 1
- B 2
- C 3
- D 4



2. Which dashed line is a line of symmetry?

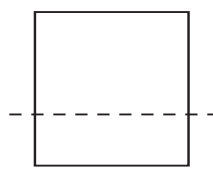
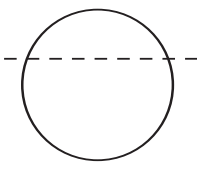
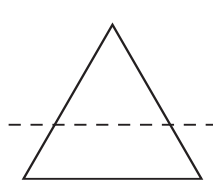
- A 
- B 
- C 
- D 

4. How many lines of symmetry does this rectangle have?

- A 1
- B 2
- C 3
- D 4



5. Which shape below has a line of symmetry correctly drawn?

- A 
- B 
- C 
- D 