
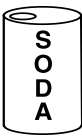



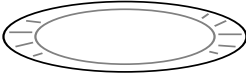


Skill 30 Interpreting Information from Pictures or Text

Use this information for questions 1–7.

GROCERY STORE SALE

 Apples	45 cents each	 S O D A	75 cents each
 Bag of 3 Apples	99 cents	 S O D A S O D A S O D A	\$3.00
 Box of 10 Apples	\$3.00	 100 Paper Plates	\$2.50

1. **Becky wants to buy 3 apples. How much money would she save if she bought a bag of apples?**
 - (A) 64 cents
 - (B) 46 cents
 - (C) 36 cents
 - (D) 26 cents

2. **Ty went to the store with \$6. What is the greatest number of apples can he buy?**
 - (A) 13
 - (B) 15
 - (C) 18
 - (D) 20